

Seat No. : _____

AB-110

April-2019

BCA, Sem.-II

CC-111 : Mathematical Foundation of Computer Science (Old)

Time : 2:30 Hours]

[Max. Marks : 70

- Instructions :**
- (1) All the questions are compulsory.
 - (2) Figures to the right indicate marks.
 - (3) Make suitable assumptions wherever necessary.

1. (A) Attempt the following :

- (i) Prove that $(G, +_5)$ is a group where $G = \{0,1,2,3,4\}$. 7
- (ii) Show that the set of all positive rational numbers forms an abelian group under the composition defined by $a \times b = (ab)/2$ 7

OR

Attempt the following :

- (i) Find the composition fog and gof where

$$f = \begin{pmatrix} 1 & 2 & 3 & 4 \\ 4 & 3 & 1 & 2 \end{pmatrix} \text{ and } g = \begin{pmatrix} 1 & 2 & 3 & 4 \\ 2 & 1 & 4 & 3 \end{pmatrix}$$

- (ii) Prove that every cyclic group is an abelian.

(B) Attempt any **Four** : 4

- (1) If '*' is any binary operation on any set S, then $a * a = a$ for all $a \in S$. (True/False)
- (2) Define transposition permutation in cyclic group.
- (3) If a is generator of a group then _____ is also generator of group.
 - (a) a^{-1}
 - (b) $a \oplus b$
 - (c) $a * b$
 - (d) $a \cdot b$
- (4) If * is binary operation on any set S, then $a * a = a$ for all $a \in S$. (True/False)
- (5) Every group is a subgroup of itself. (True/False)
- (6) In a cyclic group, every element is generator. (True/False)

2. (A) Attempt the following :

- (i) Draw Hasse diagram of (S_{100}, D) . Determine the GLB and LUB of B, where $B = \{5, 10, 20, 25\}$. 7
- (ii) Determine whether the relation R on the set of all integers is reflexive, symmetric, anti-symmetric and or transitive, where $(x, y) \in R$ i.e. xRy if & only if
- (a) $x \geq y^2$ (b) $x \leq y + 1$
(c) x is multiple of y . (d) $x \neq y$
(e) $x = y \pmod{7}$. 7

OR

Attempt the following :

- (i) Draw the Hasse diagram for the POSET (S_{150}, D) and (S_{30}, D) .
- (ii) Define the Partition of set. Determine whether or not each of the following is a partition of the set of natural numbers of positive integer with justification.

$$P_1 = \{\{x/x > 4\}, \{x/x < 4\}\}$$

$$P_2 = \{\{x/x > 4\}, \{0\}, \{x/x < 4\}\}$$

$$P_3 = \{\{x/x^2 \geq 4\}, \{x/x^2 < 4\}\}$$

(B) Attempt any **four** :

4

- (1) If the domain and range of a relation are same then relation is _____.
(a) Reflexive (b) Symmetric
(c) Equivalence (d) None of these
- (2) Give an example of relation R on set $A = \{1, 2, 3\}$ which is reflexive, symmetric and transitive.
- (3) Total number of distinct relation from set A to B is _____ where $A = \{1, 2, 3\}$ and $B = \{a, b\}$.
- (4) Find the maximal and minimal elements of the set $P = \{2, 3, 5, 7, 11, 13\}$ ordered by divisibility ?
- (5) _____ element has no multiplicative inverse in group $\langle \mathbb{Z}, * \rangle$
(a) 0 (b) 1
(c) -1 (d) none
- (6) Which relation is called Partial order relation ?

3. (A) Attempt the following :
- (i) In any Boolean algebra prove that $a = b \Leftrightarrow ab' + a'b = 0$. 7
- (ii) Define the following terms : 7
- Join Irreducible, Anti-atoms, Sub-Boolean Algebra, Complete Lattice, Complimented lattice, Distributive lattice, Bounded Lattice.

OR

Attempt the following :

- (i) Write the following Boolean expression in equivalent product-of-sum canonical form. $x_1 * (x_2 \oplus x'_3)$
- (ii) In a Boolean algebra prove that $(a + b)(a' + c) = ac + a'b + bc = ac + a'b$.
- (B) Attempt any **three** : 3
- (1) (S_6, Z) is a sublattice of
- (a) (S_{12}, D) (b) (S_{30}, D)
- (c) (S_{45}, D) (d) None of these
- (2) State the Associative law of Lattice.
- (3) State Absorption law of lattice.
- (4) In a Boolean Algebra $(B, *, \oplus, ', 0, 1)$, for any $a, b \in B$, $(a * b)' = \underline{\hspace{2cm}}$.
- (5) Let (N, D) be lattice. Which of the following subset of N is linearly ordered ?
- (a) $\{2, 3, 15\}$ (b) $\{2, 4, 16\}$

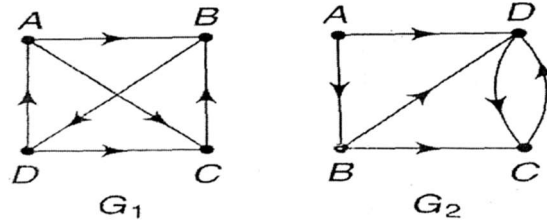
4. (A) Attempt the following :
- (i) Define a complete graph. Draw a complete graph on eight vertices. 7
- (ii) Draw the digraph G corresponding to the following matrix : 7

$$A = \begin{bmatrix} 0 & 1 & 1 & 0 \\ 0 & 0 & 0 & 0 \\ 0 & 1 & 1 & 0 \\ 0 & 2 & 0 & 0 \end{bmatrix} \text{ And hence find Path matrix.}$$

OR

Attempt the following :

- (i) Give three other representation of tree expressed by $(A(B(C)(D)(E))(F(G)(H))(J(K)(L)(M(P)(Q))(N)))$.
- (ii) Define Isomorphic graphs. Check whether the following graphs are isomorphic or not ? Why ?



(B) Attempt any **three** :

3

- (1) Draw a graph with four vertices of degree 1,1,3,3.
- (2) A directed graph $G(V, E)$ is said to be finite if its
 - (a) Set V of vertices is finite.
 - (b) Set V of vertices and set E of edges are finite.
 - (c) Set E of edges is finite.
 - (d) None of the above
- (3) Tree is acyclic connected graph. (True/ False)
- (4) Draw a graph with six vertex and four edges.
- (5) Define loop in a graph theory.

AB-110

April-2019

BCA, Sem.-II

**CC-111 : Discrete Mathematics
(New)****Time : 2:30 Hours]****[Max. Marks : 70**

- Instructions :** (1) All the questions are compulsory.
 (2) Figures to the right indicate marks.
 (3) Make suitable assumptions wherever necessary.

1. (A) Attempt the following :

(i) Define Sub-Group. Is the set $S = \{2, 4, 6, 8, 0\}$ forms the subgroup of $\langle \mathbb{Z}_{10}, +_{10} \rangle$. 7

(ii) Let the permutation of elements of $\{1, 2, 3, 4, 5, 6\}$ be given by 7

$$\alpha = \begin{pmatrix} 1 & 2 & 3 & 4 & 5 & 6 \\ 2 & 3 & 1 & 4 & 5 & 6 \end{pmatrix}; \beta = \begin{pmatrix} 1 & 2 & 3 & 4 & 5 & 6 \\ 1 & 2 & 3 & 5 & 4 & 6 \end{pmatrix};$$

$$\lambda = \begin{pmatrix} 1 & 2 & 3 & 4 & 5 & 6 \\ 5 & 4 & 3 & 1 & 2 & 6 \end{pmatrix} \text{ and } \delta = \begin{pmatrix} 1 & 2 & 3 & 4 & 5 & 6 \\ 3 & 2 & 1 & 5 & 6 & 4 \end{pmatrix}$$

Calculate $\alpha\beta$, $\beta\alpha$, α^2 , $\lambda\beta$, δ^{-1} , $\alpha\beta\lambda$ and $\alpha^{-1}\beta$.**OR**

Attempt the following :

(i) Prepare the composition table for multiplication on the element in the set $A = \{1, -1, i, -i\}$, where i is the fourth root of unity. Show that multiplication satisfies the closure property, associative law, commutative law. Find identity element and inverse of each element.

(ii) Show that the group $\{(1, 2, 4, 5, 7, 8), x_9\}$ is cyclic group. What are its generators ?

(B) Attempt any **four** : 4

(1) Given that $\{\mathbb{Z}^+, *\}$ where $*$ is defined by $a * b = a$, for all $a, b \in \mathbb{Z}^+$, is a monoid ?

(2) If $S = \{1, 2, 3, 6\}$ and $*$ is defined by $a * b = \text{Icm}(a, b)$, where $a, b \in S$, given that $\{S, *\}$ is a monoid. What is the identity element ?

(3) Given that $\{\mathbb{N}, *\}$ where $*$ is defined by $a * b = \text{gcd}(a, b)$, for all $a, b \in \mathbb{N}$. Is this algebraic structure follows associative law ?

(4) If a set A has 2 elements, then how many binary operations are possible in A ?

(a) 8 (b) 12

(c) 16 (d) 20

(5) If $*$ is a binary operation defined as $a * b = 3a - b$, then $(2 * 3) * 4 = ?$

(a) 2 (b) 3

(c) 4 (d) 5

(6) Every abelian group is a cyclic group. [True/ False]

2. (A) Attempt the following :
- (i) Draw the Hasse diagram of (S_{24}, D) and $(P(S), \subseteq)$, where $S = \{a,b,c\}$ 7
- (ii) Let a set $X = \{1,2,3,4\}$. The relation matrix $M(R)$ on a set X is given below : 7

$$M(R) = \begin{bmatrix} 0 & 1 & 1 & 0 \\ 1 & 0 & 0 & 1 \\ 1 & 0 & 0 & 1 \\ 0 & 1 & 1 & 0 \end{bmatrix}$$

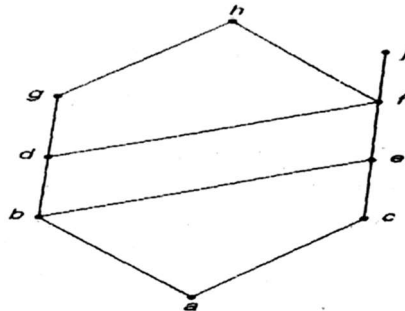
Answer the following questions :

- (a) Give R as set of ordered pairs. (e) Is the relation symmetric ?
 (b) Give domain of relation. (f) Is the relation transitive ?
 (c) Give range of relation. (g) Draw the digraph representing this relation.
 (d) Is the relation reflexive ?

OR

Attempt the following :

- (i) Define LUB and GLB. Also find LUB and GLB of the subset $A = \{b,d,g\}$ and $B = \{j, h\}$, if they exist.



- (ii) Let $A = \{a,b,c,d\}$ and
 $R = \{(a, b), (a, a), (b, a), (b, b), (c, c), (d, d), (d, e), (e, d), (e, e)\}$ and
 $S = \{(a, a), (b, b), (c, c), (d, d), (e, e), (a, c), (c, d), (d, e), (e, d)\}$ be the equivalence relation on A . Determine the partitions corresponding to $R \cap S$.
- (B) Attempt any **four** : 4
- (1) For a relation R on set A , let $M_R = [m_{ij}]$, $m_{ij} = 1$ if $a_j R a_i$ and 0 otherwise, be the matrix of relation R . If $(M_R)^2 = M_R$ then R is _____.
 (a) Symmetric (b) transitive
 (c) Antisymmetric (d) Reflexive
- (2) Let L be a set with a relation R which is transitive, antisymmetric and reflexive and for any two elements $a, b \in L$. Let least upper bound $\text{lub}(a, b)$ and the greatest lower bound $\text{glb}(a, b)$ exist. Which of the following is/are TRUE ?
 (a) L is a Poset. (b) L is Boolean algebra.
 (c) L is a lattice. (d) None of these
- (3) The less than relation, $<$, on reals is
 (a) a partial ordering since it is asymmetric and reflexive.
 (b) a partial ordering since it is anti-symmetric and reflexive.
 (c) not a partial ordering because it is not asymmetric and not reflexive
 (d) not a partial ordering because it is not anti-symmetric and not reflexive.

- (4) Which of the following pair is not congruent modulo 7 ?
 (a) 10,24 (b) 25,56
 (c) -31,11 (d) -64,15
- (5) A relation on set A is subset of _____.
 (a) $A \times A$ (b) \emptyset
 (c) A (d) None of the above
- (6) Let R be a relation on N defined by $X+2Y=8$. The domain of R is
 (a) {2, 4, 8} (b) {2, 4, 6, 8}
 (c) {2, 4, 6} (d) {1, 2, 3, 4}

3. (A) Attempt the following :

- (i) Define Distributive lattice and Complimented lattice. Check the $\langle S_{12}, D \rangle$ is complemented or not ? Distributive or not ? 7
- (ii) Show that in a complimented and distributive lattice 7
 $a \leq b \Rightarrow a * b' = 0 \Rightarrow a' \oplus b = 1 \Rightarrow b' \leq a'$

OR

Attempt the following :

- (i) Write the Boolean expression, $ab' + c$, in an equivalent sum-of-product and product-of-sum canonical form in three variables a, b and c.
- (ii) Define the following terminology :
 Complete Lattice, Complimented lattice, Boolean Algebra, Atoms in Boolean Algebra, Sub-Boolean Algebra, Bounded Lattice, Meet-Irreducible

(B) Attempt any **three** :

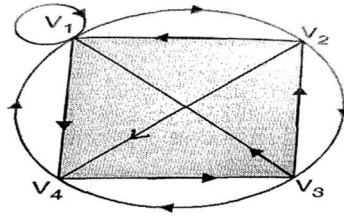
3

- (1) If B is Boolean Algebra then which of the following is true ?
 (a) B is finite but not complimented lattice.
 (b) B is finite, complimented and distributive lattice.
 (c) B is finite, distributive but not complimented lattice.
 (d) B is not distributive lattice.
- (2) The absorption law is defined as
 (a) $a * (a * b) = b$ (b) $a * (a \oplus b) = b$
 (c) $a * (a * b) = a \oplus b$ (d) $a * (a \oplus b) = a$
- (3) Complement of the expression $A'B + CD'$ is
 (a) $(A' + B)(C' + D)$ (b) $(A + B')(C' + D)$
 (c) $(A' + B')(C + D)$ (d) $(A + B')(C + D')$
- (4) Every Chain is a Lattice. [True/False]
- (5) A product term containing all K variables of the function in either complemented or uncomplemented form is called a
 (a) Minterm (b) Maxterm
 (c) Midterm (d) None of the above

4. (A) Attempt the following :

- (i) Define Path, Simple Path and Elementary path. For the graph given in the figure find 7
 (a) Find an elementary path of length 2 from V_1 to V_3 .
 (b) Find a Simple path from V_1 to V_3 , which is not elementary.

- (c) Find all possible paths from V_2 to V_4 and how many of them are simple and elementary ?

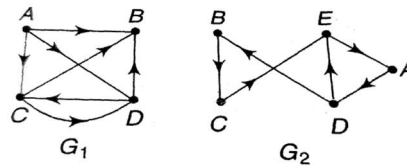


- (ii) Define the following terminology : 7
 Complete Graph, Compliment of a Graph, Isolated Vertex, Pendent vertex,
 Null Graph, Forest, Degree of a vertex in a tree.

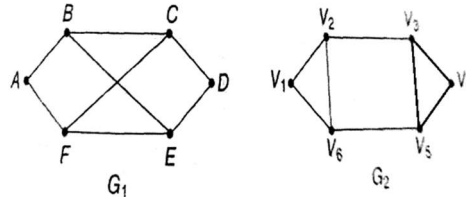
OR

Attempt the following.

- (i) Define Strongly, Weakly and Unilaterally connected graphs. Find which of the following graphs are strongly or unilaterally connected. Give the reason.



- (ii) Define Isomorphic Graphs. Check whether the following graphs are isomorphic or not ?



- (B) Attempt any **three** : 3

- (1) Which of the following statements is/are TRUE for an undirected graph ?
 P : Number of odd degree vertices is even.
 Q : Sum of degrees of all vertices is even.
 (a) P Only (b) Q Only (c) Both P and Q (d) Neither P nor Q
- (2) Adjacency matrix of all graphs are symmetric.
 (a) True (b) False
- (3) Which of the following statement is true ?
 (a) Every Graph is not its own subgraph.
 (b) The terminal vertex of a graph are of degree two.
 (c) A tree with n vertices has n edges.
 (d) A single vertex in graph G is subgraph of G .
- (4) A tree with n vertices has _____ edges.
 (a) n (b) $n + 1$ (c) $n - 2$ (d) $n - 1$
- (5) The complete graph with four vertices has k edges where k is
 (a) 3 (b) 4 (c) 5 (d) 6